



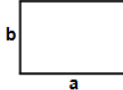


- 1)  Find area of rectangle having sides $a = 988$ ft and $b = 967$ ft


Answer: _____

- 2)  Find area of rectangle having sides $a = 992$ ft and $b = 838$ ft


Answer: _____

- 3)  Find area of rectangle having sides $a = 654$ m and $b = 406$ m

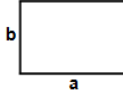
Answer: _____

- 4)  Find area of rectangle having sides $a = 889$ m and $b = 787$ m


Answer: _____

- 5)  Find area of rectangle having sides $a = 906$ cm and $b = 825$ cm

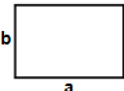
Answer: _____

- 6)  Find area of rectangle having sides $a = 915$ in and $b = 912$ in

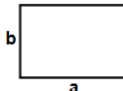
Answer: _____

- 7)  Find area of rectangle having sides $a = 969$ m and $b = 576$ m

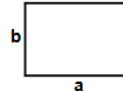
Answer: _____

- 8)  Find area of rectangle having sides $a = 402$ in and $b = 280$ in

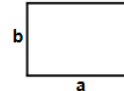
Answer: _____

- 9)  Find area of rectangle having sides $a = 486$ ft and $b = 131$ ft

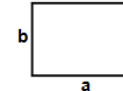
Answer: _____

- 10)  Find area of rectangle having sides $a = 648$ m and $b = 292$ m

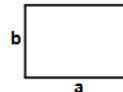
Answer: _____

- 11)  Find area of rectangle having sides $a = 475$ in and $b = 118$ in

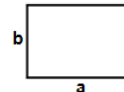
Answer: _____

- 12)  Find area of rectangle having sides $a = 907$ m and $b = 422$ m

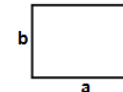
Answer: _____

- 13)  Find area of rectangle having sides $a = 970$ in and $b = 896$ in

Answer: _____

- 14)  Find area of rectangle having sides $a = 928$ ft and $b = 897$ ft

Answer: _____

- 15)  Find area of rectangle having sides $a = 689$ ft and $b = 484$ ft

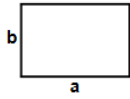
Answer: _____

Name: _____

October 28, 2021



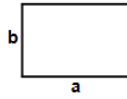
16)



Find area of rectangle having sides $a = 861$ in and $b = 625$ in

Answer: _____

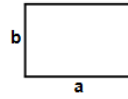
17)



Find area of rectangle having sides $a = 844$ ft and $b = 650$ ft

Answer: _____

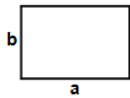
18)



Find area of rectangle having sides $a = 913$ ft and $b = 753$ ft

Answer: _____

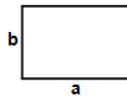
19)



Find area of rectangle having sides $a = 825$ in and $b = 515$ in

Answer: _____

20)



Find area of rectangle having sides $a = 524$ m and $b = 482$ m

Answer: _____

Total: ____ / 20

Name: _____

October 28, 2021

Sr: 28102021-2403

MATHS WORKSHEET

GENERATOR

11-PLUS
SATS
GCSES



Answers:

- | | | | | | | |
|--------------|--------------|--------------|--------------|--------------|--------------|--------------|
| 1) 955396ft | 2) 831296ft | 3) 265524m | 4) 699643m | 5) 747450cm | 6) 834480in | 7) 558144m |
| 8) 112560in | 9) 63666ft | 10) 189216m | 11) 56050in | 12) 382754m | 13) 869120in | 14) 832416ft |
| 15) 333476ft | 16) 538125in | 17) 548600ft | 18) 687489ft | 19) 424875in | 20) 252568m | |